

**FREE-STANDING MATHEMATICS QUALIFICATION
INTERMEDIATE LEVEL**

Foundations of Advanced Mathematics (MEI)

6989

Candidates answer on the answer sheet.

OCR supplied materials:

- Answer sheet (MS4)

Other materials required:

- Eraser
- Scientific calculator
- Soft pencil
- Ruler

**Friday 10 June 2011
Morning**

Duration: 2 hours



MODIFIED LANGUAGE

INSTRUCTIONS TO CANDIDATES

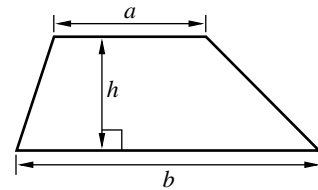
- Write your name clearly in capital letters, your centre number and candidate number on the answer sheet in the spaces provided unless this has already been done for you.
- Read each question carefully. Make sure you know what you have to do before starting your answer.
- Do **not** write in the bar codes.
- There are **forty** questions in this paper. Attempt as many questions as possible. For each question there are four possible answers, **A**, **B**, **C** and **D**. Choose the **one** you consider correct and record your choice in **soft pencil** on the separate answer sheet.
- **Read very carefully the instructions on the answer sheet.**

INFORMATION FOR CANDIDATES

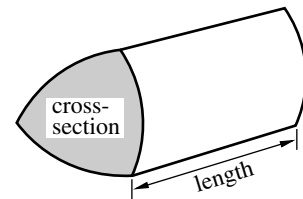
- Each correct answer will score one mark. A mark will not be deducted for a wrong answer.
- This document consists of **24** pages. Any blank pages are indicated.

Formulae Sheet: 6989 Foundations of Advanced Mathematics

$$\text{Area of trapezium} = \frac{1}{2}(a + b)h$$



$$\text{Volume of prism} = (\text{area of cross-section}) \times \text{length}$$

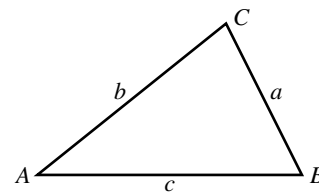


In any triangle ABC

$$\text{Sine rule} \quad \frac{a}{\sin A} = \frac{b}{\sin B} = \frac{c}{\sin C}$$

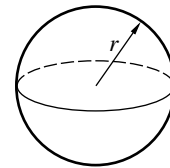
$$\text{Cosine rule} \quad a^2 = b^2 + c^2 - 2bc \cos A$$

$$\text{Area of triangle} = \frac{1}{2}ab \sin C$$



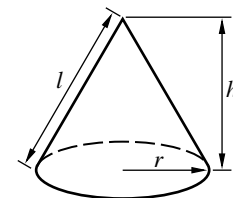
$$\text{Volume of sphere} = \frac{4}{3}\pi r^3$$

$$\text{Surface area of sphere} = 4\pi r^2$$



$$\text{Volume of cone} = \frac{1}{3}\pi r^2 h$$

$$\text{Curved surface area of cone} = \pi r l$$



The Quadratic Equation

The solutions of $ax^2 + bx + c = 0$,
where $a \neq 0$, are given by

$$x = \frac{-b \pm \sqrt{b^2 - 4ac}}{2a}$$

1 Three of the following statements are true and **one** is false. Which one is **false**?

A The LCM (lowest common multiple) of 20 and 30 is 60.

B $\frac{2 \times 4 + 3}{2 \times 4 - 3} = 2.2$

C $\sqrt{0.25^2 - 0.15^2} = 0.2$

D 13 is a factor of 2011.

2 Three of the following statements are true and **one** is false. Which one is **false**?

A $(-2)^3 \times (-3)^2 = 72$

B $2^3 \div 2^5 = 2^{-2}$

C $16^2 \div 8^2 = 2^2$

D $(-3)^3 + (-3)^2 = -18$

3 Three of the following statements are true and **one** is false. Which one is **false**?

A Half of $\frac{3}{4}$ is $\frac{3}{8}$.

B $\frac{3}{5} \times \frac{10}{33} = \frac{2}{11}$

C $\frac{1}{2} + \frac{1}{3} = \frac{5}{6}$

D $\frac{1}{3^2} + \frac{1}{4^2} = \frac{1}{5^2}$

- 4 Carlos recorded the number of people in each car passing his house in an hour.

Here are his results.

Number of people	1	2	3	4	5
Frequency	19	10	8	2	1


Which **one** of the following is the **most appropriate** diagram to use to display the data?

- A Vertical line graph
- B Cumulative frequency chart
- C Pie chart
- D Histogram
- 5 Three of the following statements are true and **one** is false. Which one is **false**?
- A $(2.1 \times 10^3) + (2.1 \times 10^4) = 2.31 \times 10^4$
- B $(1.7 \times 10^6) - (2.8 \times 10^6) = 1.1 \times 10^6$
- C $(2.6 \times 10^4) \times (4.5 \times 10^5) = 1.17 \times 10^{10}$
- D $\frac{7.6 \times 10^4}{3.8 \times 10^{-2}} = 2 \times 10^6$
- 6 Three of the following statements are true and **one** is false. Which one is **false**?
- A 32% is equivalent to $\frac{8}{25}$.
- B When expressed as a decimal, $\frac{1}{41}$ recurs.
- C 1 in 10 000 is equivalent to 0.001%.
- D 120% is equivalent to 1.2.

- 7 The length of a rectangular room is 5.1 m, correct to 1 decimal place, and the width is 4.0 m, correct to 1 decimal place.

Three of the following statements are true and **one** is false. Which one is **false**?

- A The greatest possible difference between the length of the room and the width is 1.1 m.
 - B The perimeter is no greater than 18.4 m.
 - C The area is greater than 19.9 m^2 .
 - D The area is less than 20.9 m^2 .
- 8 Here is a drawing of a bus.



Which **one** of the following is the **best** estimate of the height of this bus?

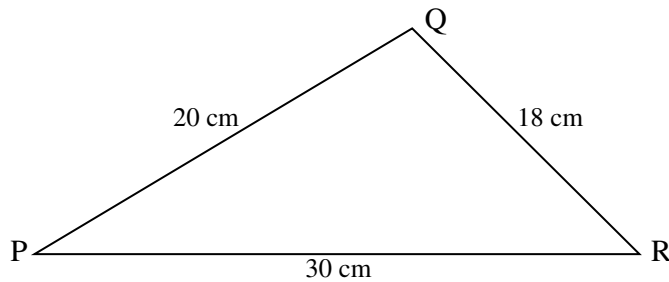
- A 2 m
- B 4 m
- C 7 m
- D 10 m

- 9 In a town there are 40 factories. The following table shows the numbers of employees of these factories.

Number of employees	1 – 10	11 – 20	21 – 30	31 – 40	41 – 50
Frequency	2	7	13	12	6

Three of the following statements are true and **one** is false. Which one is **false**?

- A A reasonable estimate of the mean number of employees is 28.75.
- B A reasonable estimate of the median number of employees is 25.5.
- C The range could be as great as 49.
- D If a factory is selected at random, then the probability that it employs 10 people or fewer is 0.05.
- 10 In the triangle PQR, $PR = 30$ cm, $RQ = 18$ cm and $QP = 20$ cm.



Not to scale

Which **one** of the following is the **correct** value for the angle at Q, correct to the nearest degree?

- A 104° B 76° C 119° D 61°

11 In a tutor group of 40 students:

- The ratio of boys to girls is 3 : 1
- The ratio of left-handed students to right-handed students is 1 : 4
- 4 girls are left-handed.

Three of the following statements are true and **one** is false. Which one is **false**?

- A The number of boys is 30.
- B The number of left-handed students is 8.
- C The number of right-handed boys is 24.
- D The ratio of right-handed boys to left-handed boys is 13 : 2.

12 In a sale, men's suits are being sold at a discount of 20%.

Three of the following statements are true and **one** is false. Which one is **false**?

- A A suit that was originally priced at £120 is now being offered for £100.
- B '20% off' means that you pay $\frac{4}{5}$ of the price.
- C A suit that is now selling for £144 was originally £180.
- D Abdul saves £40 by buying a suit in the sale. The original price of the suit was £200.

- 13 Three vectors are given by $\mathbf{a} = \begin{pmatrix} 1 \\ 2 \end{pmatrix}$, $\mathbf{b} = \begin{pmatrix} 2 \\ -1 \end{pmatrix}$, $\mathbf{c} = \begin{pmatrix} -3 \\ 4 \end{pmatrix}$.

You are given that $\mathbf{a} + k\mathbf{b} = \mathbf{c}$.

Which **one** of the following is the **correct** value for k ?

- A 1
- B 2
- C -1
- D -2

- 14 On February 2nd, 2009 there was a heavy snow fall and many trains and buses did not run. It was reported that on one mobile phone network, between 0800 and 0805 on that morning, there were half a million text messages. The company reported that this was 50% up on a 'normal day'.

Which **one** of the following gives the **approximate number** of text messages sent through that network on a normal day in that period?

- A 250 000
- B 200 000
- C 333 000
- D 1 million

- 15 Abbie and Beth each throw a normal unbiased die, numbered 1 to 6.

Which **one** of the following is the **correct** probability that the two numbers are the same?

- A $\frac{1}{2}$
- B $\frac{1}{6}$
- C $\frac{1}{12}$
- D $\frac{1}{36}$

16 Three of the following statements are true and **one** is false. Which one is **false**?

- A The line $\frac{x}{4} + \frac{y}{7} = 1$ passes through the point (4, 7).
- B The gradient of the line $7x - 4y = 5$ is $\frac{7}{4}$.
- C The line $7x - 4y = 5$ cuts the y -axis at the point $(0, -\frac{5}{4})$.
- D The line through the two points (1, 2) and (-5, 7) has equation $5x + 6y = 17$.

17 A recent news item claimed that there were 71 road signs on a $\frac{1}{2}$ mile (880 yards) stretch of road.

Three of the following statements are consistent with this claim and **one** is not. Which one is **not**?

- A On average there is 1 sign every 12.4 yards.
- B On average there are about 8 signs per 100 yards.
- C On average there are about 57 signs per kilometre.
- D Travelling at 30 mph, a driver passes more than 1 sign per second on average.

18 Which **one** of the following quadratic equations has **no** real solution?

A $x^2 - 2x - 1 = 0$

B $x^2 - 2x = 0$

C $x^2 - 2x + 1 = 0$

D $x^2 - 2x + 3 = 0$

19 Three of the following statements are true and **one** is false. Which one is **false**?

A $x^2 + x^2 + x^2 = 3x^2$

B $\frac{x^2 \times x^4}{x^3} = x^3$

C $2x^2y \times 3xy^2 = 6(xy)^3$

D $(2x^2y^3)^4 = 8x^8y^{12}$

- 20 In this question, $a = 3$, $b = -4$, $c = 2$.

Three of the following statements are true and **one** is false. Which one is **false**?

A $4b^2 = 64$

B $abc = -24$

C $ab + bc + ca = -26$

D $\frac{a-b}{a-c} = 7$

- 21 The spread of a virus through a population in a town can be modelled by the formula $P = \frac{1}{2} \times 2^n$ where P is the number of infected people on day n .

Three of the following statements are true and **one** is false. Which one is **false**?

A On day 1 there is 1 infected person.

B On day 2 there are 2 infected people.

C On day 4 there are 4 infected people.

D On day 10 there are 512 infected people.

- 22 Four students try to rearrange the formula $s = vt - \frac{1}{2}at^2$ so that a is the subject. Only one of them is correct.

Which **one** of the following is a **correct** rearrangement?

A $a = \frac{2(s-v)}{t}$

B $a = \frac{2s-vt}{t^2}$

C $a = \frac{2(vt-s)}{t^2}$

D $a = \frac{v}{t} - 2\frac{s}{t^2}$

23 Which **one** of the following is the **correct** solution of the inequality $\frac{3x}{4} > \frac{1-x}{3}$?

A $x > \frac{2}{5}$

B $x > \frac{4}{13}$

C $x > \frac{1}{2}$

D $x > \frac{4}{5}$

24 A microwave cookery book gives the following instructions for cooking a joint of lamb.

Cook for 9 minutes per 500 grams plus 2 minutes.

T is the cooking time in minutes.

M is the mass of the joint of meat in kilograms.

Which **one** of the following is the **correct** formula for T ?

A $T = \frac{M+2}{18}$

B $T = 18M + 2$

C $T = \frac{500M}{9} + 2$

D $T = 18(M+2)$

25 Only **one** of the following quadratic expressions can be factorised in the form $(x + 1)(x + a)$ where a is a whole number. Which one **can** be factorised in this way?

A $x^2 + 4x + 3$

B $x^2 - 4x + 3$

C $x^2 + 3x + 4$

D $x^2 + 3x - 4$

26 Dasras is attempting to solve the following simultaneous equations.

$$3x - 4y = 5 \quad (\text{i})$$

$$2x + 5y = 1 \quad (\text{ii})$$

His attempt is shown in the following four steps below, but the answer is incorrect.

In which of the following steps, **A**, **B**, **C**, **D** does the **first** error appear?

A Multiply (i) by 5 giving $15x - 20y = 25$ (iii)

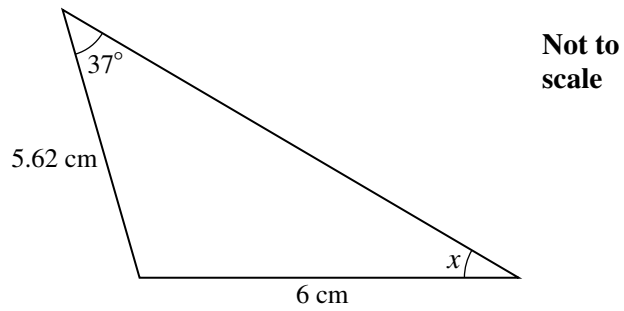
Multiply (ii) by 4 giving $8x + 20y = 4$ (iv)

B Subtract (iv) from (iii) giving $7x = 21$

C Divide by 7 giving $x = 3$

D Substitute into (i) to give $9 - 4y = 5$ and hence $y = 1$

27 Which **one** of the following is the **correct** value for x in the diagram?



- A 37.0° , correct to 1 decimal place.
- B 43.1° , correct to 1 decimal place.
- C 34.3° , correct to 1 decimal place.
- D 40.0° , correct to 1 decimal place.

28 In the following formula, y is to be evaluated using a given value for x .

$$y = \frac{x^2 - 5}{x}$$

Which **one** of the following set of instructions will give the **correct** value for y ?

- A Square x , subtract 5 and divide the result by x .
- B Square x , subtract 25 and divide the result by x .
- C Square x and subtract the result of dividing 5 by x .
- D Subtract 5 from x , square the result and then divide by x .

29 Which **one** of the following equations has a solution which is **not** an integer?

A $5x + 2 = 14 - x$

B $3x + 2 = 2(x + 7)$

C $3(2x - 1) = 11 - 2(3x - 1)$

D $2(x - 2) + 3(2 - x) = 5$

30 Which **one** of the following is a **correct** simplification of $\frac{2x + 3}{4} - \frac{1 - 3x}{5}$?

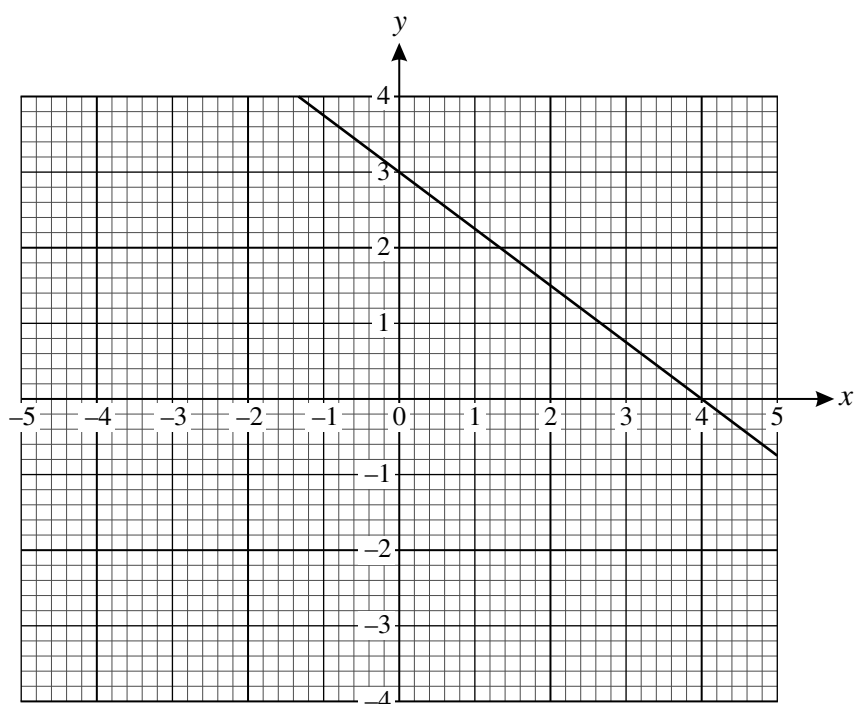
A $\frac{11(2x + 1)}{20}$

B $\frac{11 - 2x}{20}$

C $\frac{13x - 1}{20}$

D $\frac{2 - x}{20}$

31 John has drawn the graph of an equation on the grid as shown below.



He wishes to find where this line meets the line whose equation is $2y = 5x - 7$.

You are advised that to answer this question you should draw the graph of the line $2y = 5x - 7$ on the grid above.

Which **one** of the following points is the point of intersection of the two lines?

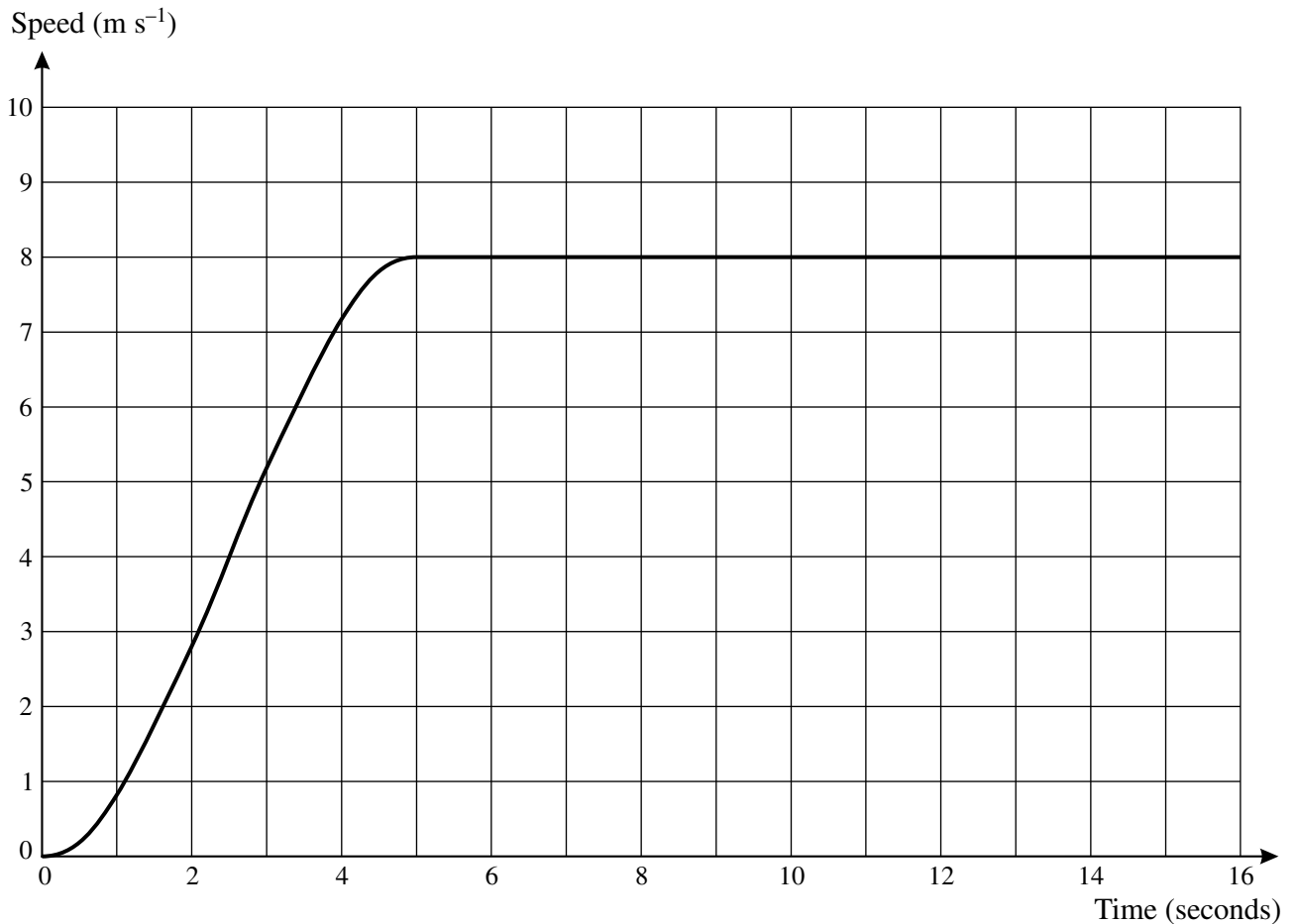
- A $(2, 1\frac{1}{2})$
- B $(1\frac{1}{2}, 2)$
- C $(1.75, 1.7)$
- D $(3, 0.75)$

32 In a group of 10 students there are 6 males and 4 females. Two students are chosen at random.

Which **one** of the following is the **correct** probability that one male and one female are chosen?

- A $\frac{4}{15}$ B $\frac{8}{15}$ C $\frac{6}{25}$ D $\frac{12}{25}$

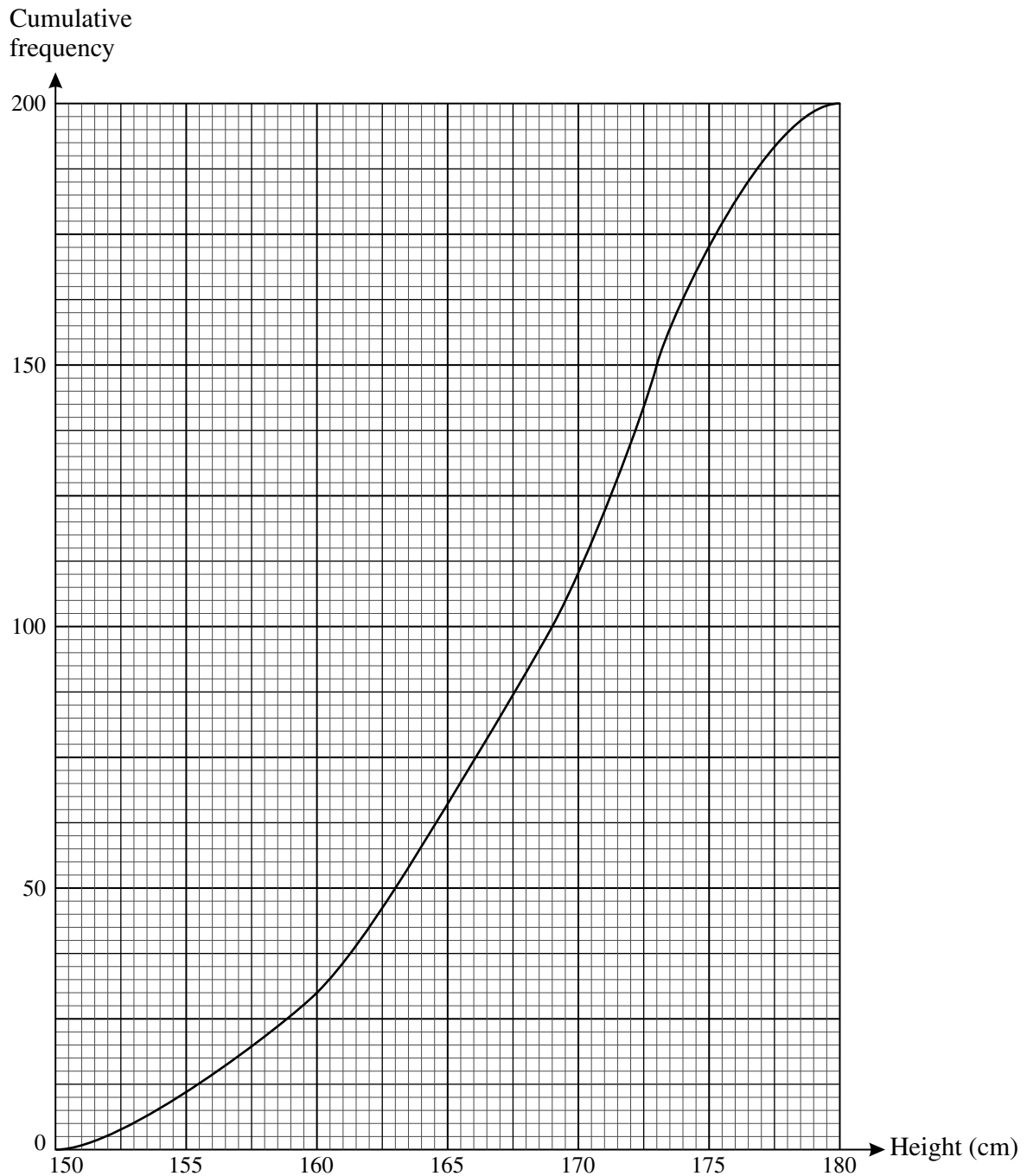
33 Paul recently took part in a 100 m race. His speed during the race is shown in the graph below.



Three of the following statements are true and **one** is false. Which one is **false**?

- A His greatest acceleration was approximately 2.4 m s^{-2} .
- B During acceleration to the maximum speed he travelled approximately 20 metres.
- C His constant speed 5 seconds after starting the race was 24 km h^{-1} .
- D Paul crosses the finishing line after approximately 15 seconds.

- 34 The cumulative frequency curve summarises the heights of students in a college.

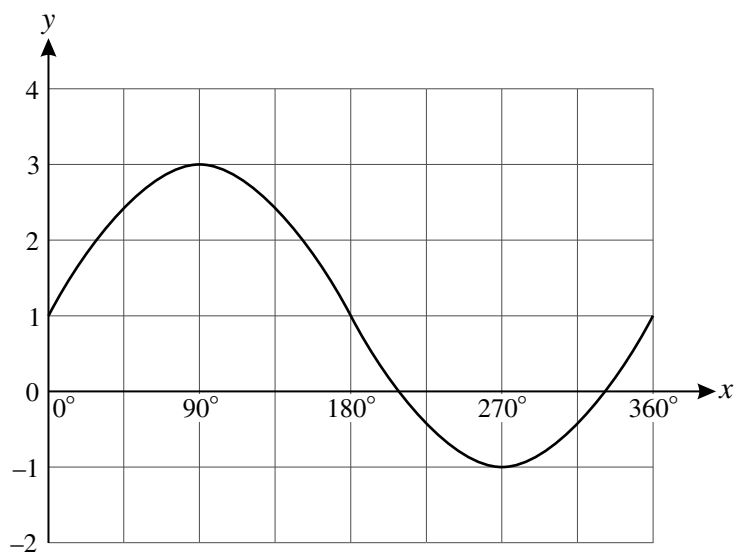


Three of the following statements are true and **one** is false. Which one is **false**?

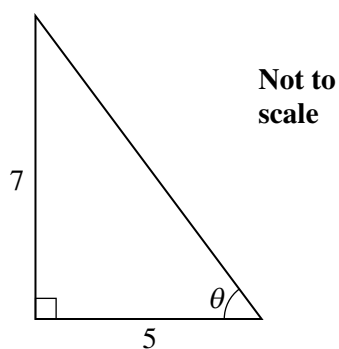
- A The heights of 200 students are summarised on the graph.
- B The median height is about 169 cm.
- C The interquartile range is about 10 cm.
- D The students all go to a theme park where the minimum height allowed on one of the rides is 160 cm. Approximately 15% of the students will be able to go on the ride.

35 Three of the following statements are true and **one** is false. Which one is **false**?

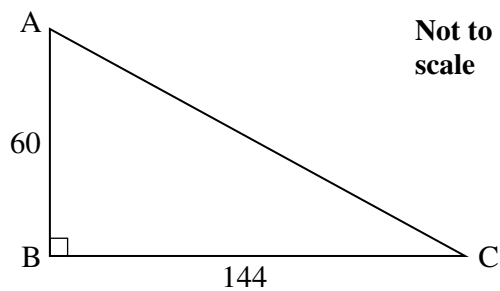
A This is part of the curve $y = 1 + 2 \sin x$.



B In this triangle $\theta = 54.5^\circ$, correct to 1 decimal place.

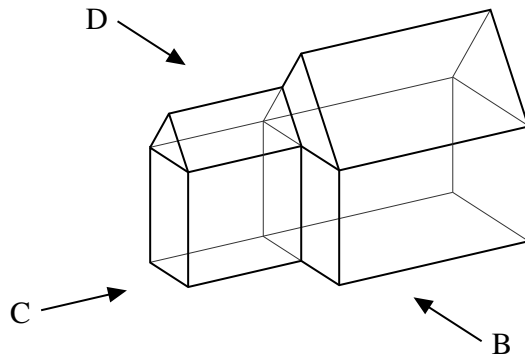


C In this triangle, $AC = 156$.



D $\cos 170^\circ = \cos 10^\circ$

36 The diagram illustrates a house which has an extension on one side.

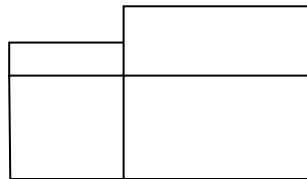


Three of the following diagrams are correct and **one** is incorrect. Which one is **incorrect**?

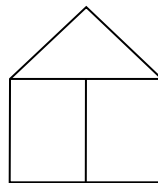
A This is the plan.



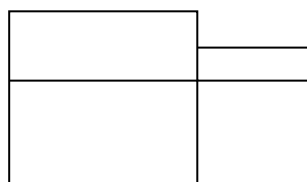
B This is the side view from B.



C This is the side view from C.



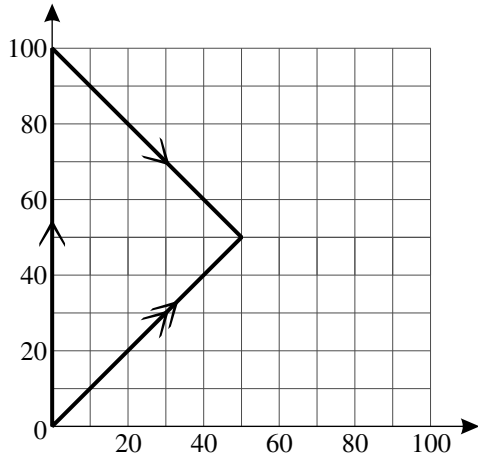
D This is the side view from D.



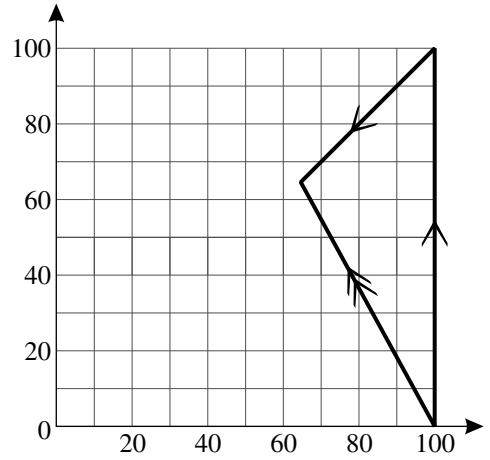
37 Peter is flying a light aircraft and is heading due north at 100 km per hour. The wind is from the northeast at 50 km per hour.

Which **one** of the following represents the direction and speed in which Peter travels?

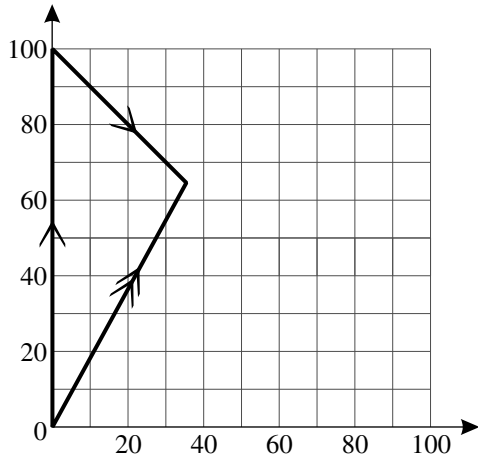
A



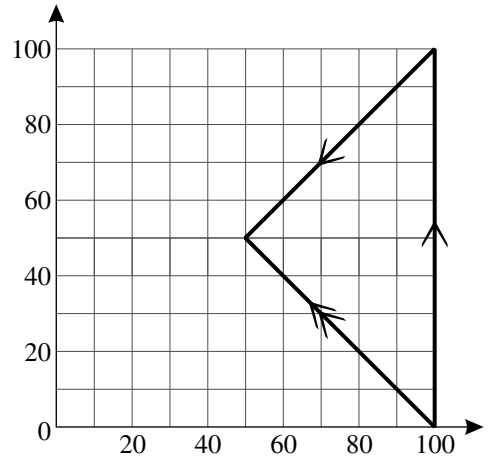
B



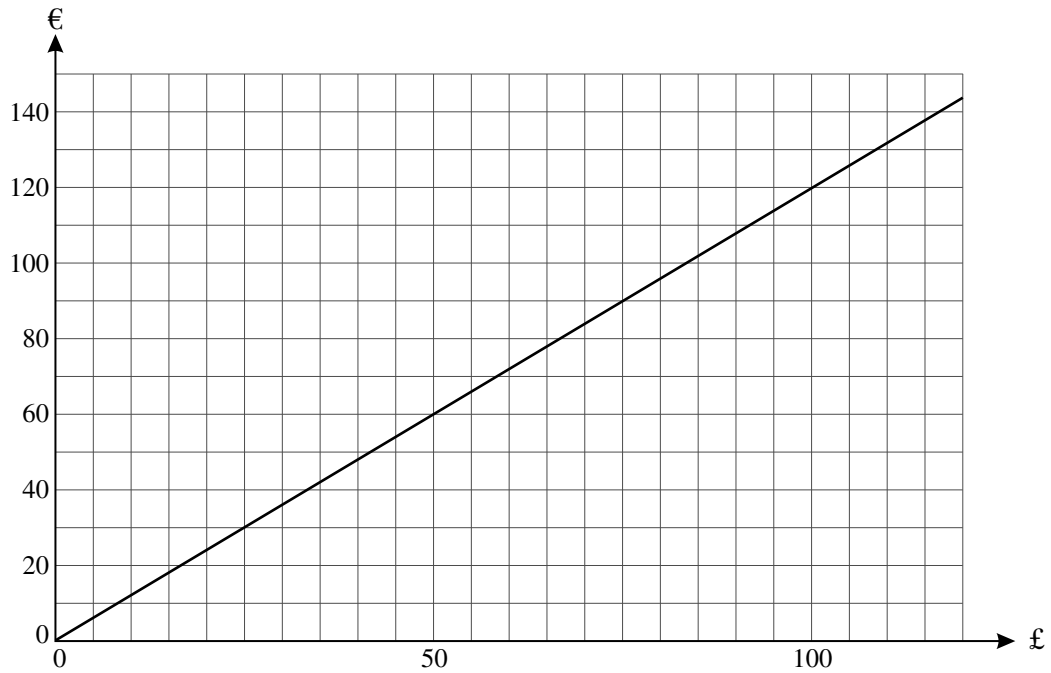
C



D



38 The graph below represents the conversion between pounds and euros one day.



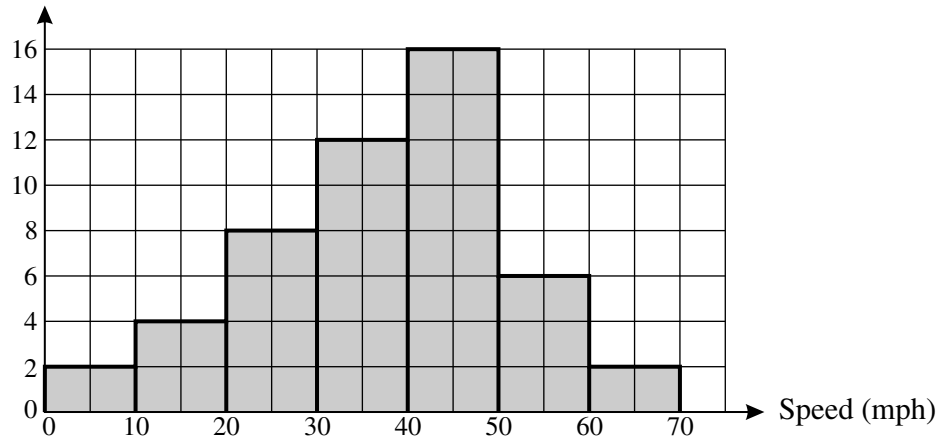
Three of the following statements about the graph are true and **one** is false. Which one is **false**?

- A £1 is worth less than €1.50.
- B €50 is roughly equivalent to £42.
- C £60 is roughly equivalent to €70.
- D On a later occasion I paid £77.10 for €100. The conversion graph for this exchange rate would be less steep than that drawn above.

- 39 On two stretches of road a council record the speeds of cars over a period of two hours. The results are shown in the histograms below.

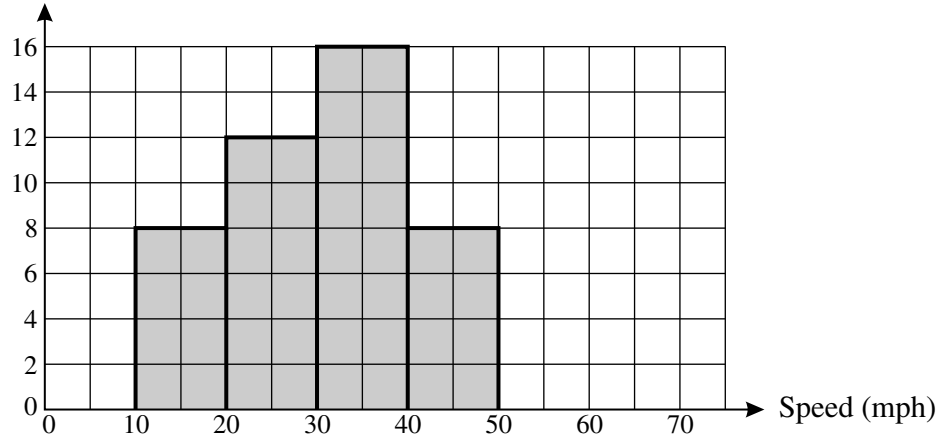
Road X

Frequency density
(cars per 10 mph)



Road Y

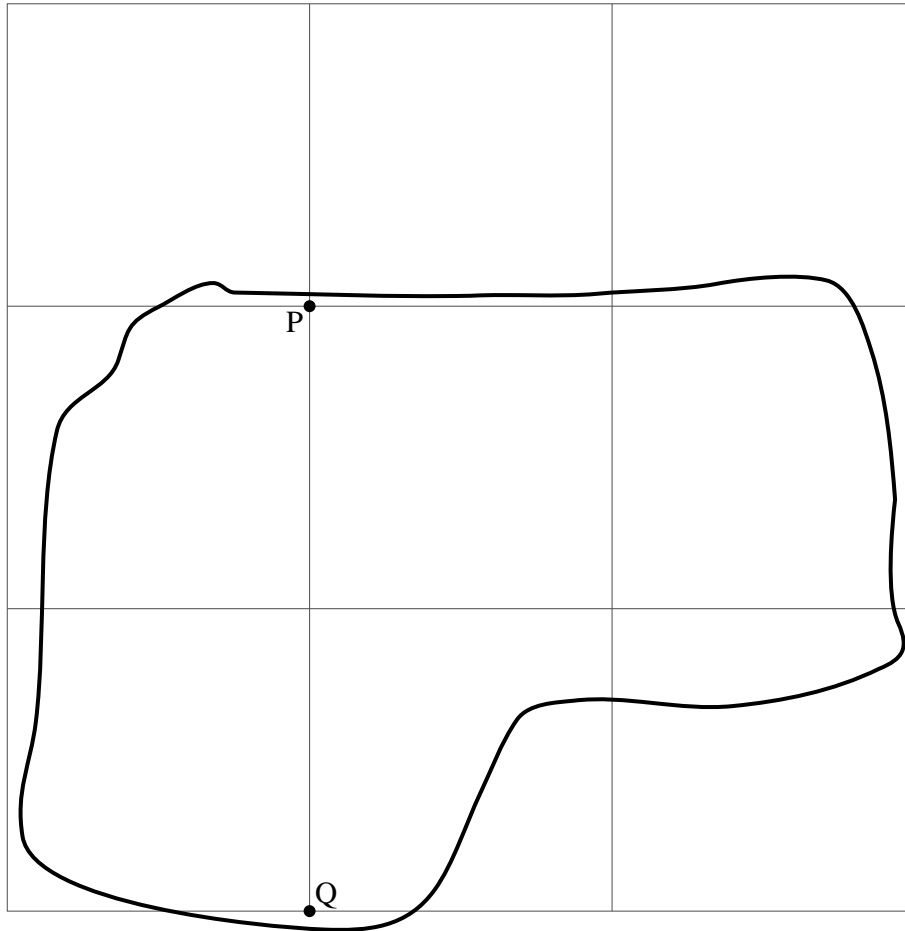
Frequency density
(cars per 10 mph)



Three of the following statements are true and **one** is false. Which one is **false**?

- A Two of the cars on Road X were recorded as travelling below 10 mph.
- B The speed limit is 40 mph on both roads. The number of cars travelling below the speed limit on Road X was 10 fewer than the number of cars travelling below the speed limit on Road Y.
- C The mean speed on Road Y is lower than that on Road X.
- D The spread of speeds is greater on Road Y.

- 40 The diagram is part of a map showing a field. It is drawn on a four centimetre square grid. The scale is 1 : 25 000.



Three of the following statements are true and **one** is false. Which one is **false**?

- A The actual distance between P and Q is two kilometres.
- B One square on the map represents 1 km^2 .
- C An area on the map of 1 cm^2 corresponds to an actual area of $625\,000 \text{ m}^2$.
- D An upper estimate of the area of the field is 5 km^2 .

Copyright Information

OCR is committed to seeking permission to reproduce all third-party content that it uses in its assessment materials. OCR has attempted to identify and contact all copyright holders whose work is used in this paper. To avoid the issue of disclosure of answer-related information to candidates, all copyright acknowledgements are reproduced in the OCR Copyright Acknowledgements Booklet. This is produced for each series of examinations and is freely available to download from our public website (www.ocr.org.uk) after the live examination series. If OCR has unwittingly failed to correctly acknowledge or clear any third-party content in this assessment material, OCR will be happy to correct its mistake at the earliest possible opportunity. For queries or further information please contact the Copyright Team, First Floor, 9 Hills Road, Cambridge CB2 1GE.

OCR is part of the Cambridge Assessment Group; Cambridge Assessment is the brand name of University of Cambridge Local Examinations Syndicate (UCLES), which is itself a department of the University of Cambridge.